

**Blue Class Home Learning**  
**Tuesday 1<sup>st</sup> December**

English Writing	<p>We are still looking at Mog's Christmas Calamity.</p> <p>Please watch the video again to familiarise yourself with the story. <a href="https://www.youtube.com/watch?v=oQeTom4V2RE">https://www.youtube.com/watch?v=oQeTom4V2RE</a></p> <p>Once, you have done that I would like you to re-watch but pause at a point where Mog opens the oven door.</p> <p>The first thing I would like you to do is write a list (word bank) to help you with your writing. Can you write down any words/ ideas that you think links to these questions: <b>How do you think she is feeling? What do you think she is thinking? What can she see? Smell? Hear? Feel?</b></p> <p>The second thing I would like you to do is, use your word bank to write some fantastic sentences to describe what Mog could be seeing, smelling, hearing, thinking and asking.</p> <p>Start your writing with the sentence starter – <i>When Mog...</i></p> <p>Example to help you with your writing:</p> <p><i>When Mog opened the oven door, she saw a big puff of black smoke and could smell something repulsive. It was a burnt Christmas turkey. Poor Mog was baffled because she didn't remember Mrs Thomas leaving the oven on. What a calamity! She thought.</i></p> <p>Please remember capital letters, full stops and finger spaces.</p>
Maths	<p>We are continuing with multiplication. I would like you have to have a go at the multiplication sheet provided on page <b>2, 3</b> and <b>4</b></p> <p>In this session we are focusing on the 2 times table. Provided there are 3 sheets. Can you start with the one that is on page <b>2</b>. Your challenge is to see if you can complete the other 2 pages provided as well that are on page <b>3</b> and <b>4</b>.</p>
Phonics	<p>Can you first read the real and alien (nonsense) words provided on page <b>5</b>. Then can you put each of the real words into a sentence.</p> <p>After that in this session we will be looking at the "au" sound. Please watch the You Tube video to listen to the au sound <a href="https://www.youtube.com/watch?v=RBPIvgL89jQ">https://www.youtube.com/watch?v=RBPIvgL89jQ</a></p> <p>Then complete the worksheet provided on page <b>6</b>. Please read each word and tell an adult if it is a <b>real</b> or an <b>alien</b> word. Can you please colour in the real words in one colour and the alien words in another colour.</p> <p><b>Challenge-</b> Can you write the real words in to sentence of your own</p>
Reading	<p>Please log in to Purple Mash: <a href="https://www.purplemash.com/sch/beaupre">https://www.purplemash.com/sch/beaupre</a></p>

Read through chapter 1 of Anna and the third leaf and then complete the quiz that has also been assigned to you as a 2do on purple mash.

1a. Use the pictures to complete the calculation.



$$\square \times 2 = \square$$



VF

1b. Use the pictures to complete the calculation.



$$\square \times 2 = \square$$



VF

2a. True or false?

$$5 \times 2 = 7$$



VF

2b. True or false?

$$2 \times 2 = 4$$



VF

3a. Match each calculation to the correct answer.

A.  $2 \times 6$  8

B.  $4 \times 2$  12



VF

3b. Match each calculation to the correct answer.

A.  $7 \times 2$  10

B.  $2 \times 5$  14




VF

4a. Find the missing numbers.

A.  $10 \times 2 = \square$




B.  $9 \times 2 = \square$




VF

4b. Find the missing numbers.

A.  $11 \times 2 = \square$



B.  $8 \times 2 = \square$



VF

5a. Use the number pieces to complete the calculation.



$$\square \times 2 = \square$$



VF



VF

5b. Use the number pieces to complete the calculation.



$$\square \times 2 = \square$$

VF

6a. True or false?

$$9 \times 2 = 19$$

19								
2	2	2	2	2	2	2	2	2



VF



VF

6b. True or false?

$$6 \times 2 = 16$$

16					
2	2	2	2	2	2

VF

7a. Match each calculation to the correct answer.

- A.  $5 \times 2$                       20
- B.  $2 \times 10$                       16
- C.  $12 \times 2$                       10
- D.  $2 \times 8$                         24



VF



VF

7b. Match each calculation to the correct answer.

- A.  $4 \times 2$                         10
- B.  $2 \times 9$                         22
- C.  $11 \times 2$                       8
- D.  $2 \times 5$                         18

VF

8a. Find the missing numbers.

A.

2	2	2	2	2	2	2	2

B.

8		12		16
---	--	----	--	----



VF



VF

8b. Find the missing numbers.

A.

2	2	2	2	2	2	2	2

B.

16		20		24
----	--	----	--	----

VF

9a. Use the number pieces to complete the calculation.



$$\square \times 2 = \square$$



VF

9b. Use the number pieces to complete the calculation.



$$\square \times 2 = \square$$



VF

10a. True or false?

The missing number is 14.

$$12 \times 2 = \square$$



VF

10b. True or false?

The missing number is 18.

$$8 \times 2 = \square$$



VF

11a. Use <, > or = to make each statement correct.

- A.  $11 \times 2$   $\square$  21  
B.  $2 \times 13$   $\square$  26  
C.  $10 \times 2$   $\square$  20  
D.  $2 \times 15$   $\square$  25



VF

11b. Use <, > or = to make each statement correct.

- A.  $14 \times 2$   $\square$  30  
B.  $2 \times 9$   $\square$  19  
C.  $13 \times 2$   $\square$  20  
D.  $2 \times 8$   $\square$  16



VF

12a. Find the missing numbers.

A.  $2 \times 14 = \square$

B. 

24		28		32
----	--	----	--	----



VF

12b. Find the missing numbers.

A.  $2 \times 15 = \square$

B. 

32		36		40
----	--	----	--	----



VF

jash




blot

quib



greet

coid



dust

quass



parks

below.

Key

Real Words

Nonsense Words

Paul	raub	haul	zaul
baunted	launch	jaub	haunted
Saul	dautumn	August	nauthor
laugust	jaunty	paunted	author
automatic	taunch	autumn	vaul

