

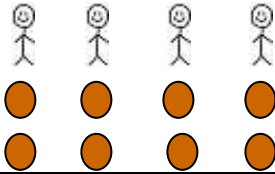


Blue Class Home Learning
Monday 30th November

PE	<p>Please go onto You Tube and follow this link to https://www.youtube.com/watch?v=Rz0go1pTda8</p> <p>Please watch and follow along with Joe for your Pe lesson for the day</p>
English Writing	<p>Last week in English we were looking at Mog's Christmas Calamity.</p> <p>Please watch the video again to familiarise yourself with the story. https://www.youtube.com/watch?v=oQeTom4V2RE</p> <p>After you have watched the video can you act it out or explain it to another member of your family.</p> <p>Once, you have done that I would like you to think about Mog and write a character description about her. I would like you think about different adjectives you could use to describe Mog, what she looks like and also her personality.</p> <p>Use the pictures below to help you:</p> <div data-bbox="357 913 762 1182"></div> <div data-bbox="810 927 1219 1173"></div>
Maths	<p>Last week we started on multiplication. I would like you have to have a go at the multiplication sheet provided on page 2 and 3.</p> <p>For each question, can you draw an array for each calculation and write the answer in the box provided. If you can have a go at the challenge provided. The first one has been done for you to help you with how to set it out</p>
Phonics	<p>Can you first read the real and alien (nonsense) words provided on page 4. Then can you put each of the real words into a sentence.</p> <p>After that in this session we will be looking at the "air" sound. Please read the story provided on page 5 to an adult. After you have read the story, can you please colour in all of the words that have the "air" sound in them. Please discuss the meaning of these words with an adult.</p>

The baker needs you to help her work out how many cakes have been ordered. Draw the cakes in an array for her.



Question	Array
<p>4 people want 2 biscuits each. 4 groups of 2</p> <p>$4 \times 2 = \underline{8}$</p>	<p>1 2 3 4</p> 
<p>2 people want 3 cupcakes each. 2 groups of 3</p> <p>$2 \times 3 = \underline{\quad}$</p>	<p>1 2</p>
<p>5 people want 2 biscuits each. 5 groups of 2</p> <p>$5 \times 2 = \underline{\quad}$</p>	<p>1 2 3 4 5</p>
<p>2 people want 7 bread rolls each. 2 groups of 7</p> <p>$2 \times 7 = \underline{\quad}$</p>	<p>1 2</p>
<p>2 people want 4 loaves each. 2 groups of 4</p> <p>$2 \times 4 = \underline{\quad}$</p>	<p>1 2</p>
<p>2 people want 2 biscuits each. 2 groups of 2</p> <p>$2 \times 2 = \underline{\quad}$</p>	
<p>7 people want 2 cup cakes each. 7 groups of 2</p> <p>$7 \times 2 = \underline{\quad}$</p>	

10 people want 2 gingerbread men each. 10 groups of 2 $10 \times 2 = \underline{\quad}$	
3 people want 5 cookies each. 3 groups of 5 $3 \times 5 = \underline{\quad}$	

Challenge

Can you write out the number sentence needed to solve the bakers problem. Can you also draw an array to help you?

1. 2 people want 10 small cakes each
2 groups of 10

2. 4 people want 4 gingerbread each
4 groups of 4

3. 5 people want 4 scones each
5 groups of 4

4. 8 people want 5 scones each
8 groups of 5


dat



cag



rin



ept



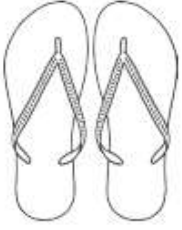
chum

kick

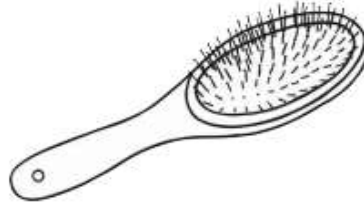
reef

short

Clair at the Funfair



It was hot. Clair sat on a chair to put on a pair of red flip-flops.



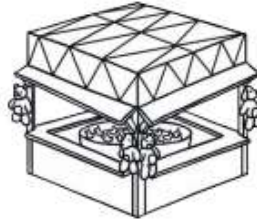
Then, she brushed her short hair and put in a clip.



After that, she set off to the park. Clair went to the funfair at the park. The fair was fun.



At the park, she met Gair. They went to get a ticket together. The fair ticket was silver.



Clair and Gair had lots of fun. Clair went to the hook-a-duck. She got a duck and then a doll.



Gair had to finish at the fair, as his mum was waiting. He felt it was unfair, as Clair was still at the park. He might go back again the next day.