

Purple Class Home Learning
Monday 30th November

Reading	<p>Please log in to Purple Mash: https://www.purplemash.com/sch/beaupre</p> <p>Read through the chapter which you have been assigned.</p> <p>If you have been assigned 'School Swap' please complete the online multiple choice quiz.</p> <p>If you have been assigned 'Ned and the Jungle Animals' please complete the multiple choice quiz.</p>
Writing	<p>Our writing this week is going to be based around a short film called 'The Dragon Slayer'.</p> <p>Please watch the video: https://www.youtube.com/watch?v=PPiDfchF7G0</p> <p>Once you have watched the video, I would like you to look think about the Dragon Slayer and write a character description about him. When writing this, think about the range of adjectives you could use to describe both the way he looks and his personality.</p>
Maths	<p>For this lesson, I would like you to have a go at the addition and subtraction word problems on page 2. For each question, I would like you to explain your reasoning as to why you have either added or subtracted.</p> <p>If you have been working with Mrs Titmarsh for maths, I would like you to complete the addition and subtraction sheet on page 3.</p>
Music	<p>https://classroom.thenational.academy/lessons/composing-rhythms-ccrk0d</p> <p>Please watch from 13 minutes 53 seconds of this video. From here it will recap the musical notes which we have learnt in class so far this half term and teach you a new note of ta-ah-ah-ah (4 beats).</p> <p>Once you have watched the video, I would like you to compose a 24 beat rhythm. You can use the resources on page 4 to support you including a list of the different notes which we have learnt as well as a 24 beat grid for you to compose your rhythm.</p>

Maths Worksheet

Solve the following problems:

- 1) There are 167 books in one classroom and 392 books in the other.
How many books are there altogether in both classrooms?
- 2) Jay has a collection of 263 football cards. His brother has 189.
How many more football cards does Jay have?
- 3) A family drive 208 miles from London to Manchester, and then 213 miles on to Glasgow.
How far did they travel altogether?
- 4) A cricket team score 456 in the first innings and 249 in the second innings.
How many runs did they score altogether?
- 5) Jenny has £5.67. She spends £2.85 on a present for her brother.
How much money does she have left?
- 6) Abi collects stamps. She has 351 in a box and 456 in a book.
How many does she have altogether?
- 7) A lorry driver has a 561 mile journey. He stops for a break after 314 miles.
How much further has he to travel?
- 8) A pack of Christmas cards costs £5.49.
How much change would there be from £10.00?
- 9) A packet of lentils weighs 450g and a packet of kidney beans weighs 385g.
How much do they both weigh altogether?
- 10) A shopkeeper has 367 bottles of lemonade.
He orders 480 more. How many bottles of lemonade will he have now?

Addition and Subtraction Spotlight Number Activity Sheet

Find the missing numbers:

$$14 - \square = 6$$
$$\square + 6 = 14$$

Complete:

$$14 - 4 = \square$$
$$14 - 7 = \square$$
$$14 - 10 = \square$$

Complete:

$$6 + 5 = \square$$
$$6 + 8 = \square$$
$$6 + 20 = \square$$
$$6 + 40 = \square$$

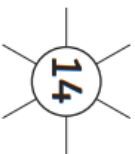
Complete:

$$14 + 3 = \square$$
$$14 + 9 = \square$$
$$14 + 10 = \square$$

Write a story to represent $14 + 6$

How many ways can you represent 14 and 6?







$$9 + 5 = 14$$



$$10 - 4 = 6$$



Music Resources

	<p>Official name: Semibreve Sound: ta-ah-ah-ah Duration: 4 beats</p>
	<p>Official name: Crotchet Sound: ta Duration: 1 beat</p>
	<p>Official name: Minim Sound: ta-ah Duration: 2 beats</p>
	<p>Official name: Quavers Sound: titi Duration: 1 beat (2x ½ beats)</p>
	<p>Official name: Semiquavers Sound: ti-ka-ti-ka Duration: 1 beat (4x ¼ beats)</p>
	<p>Official name: Rest Sound: (ta) Duration: 1 beat</p>

